


Name \_\_\_\_\_

Date \_\_\_\_\_


# Measurement!

How many units tall? Measure and write the number of units.




A key and a carrot are shown next to a vertical ruler with units numbered 1 to 7. The key is 2 units tall, and the carrot is 5 units tall.

\_\_\_ units      \_\_\_ units



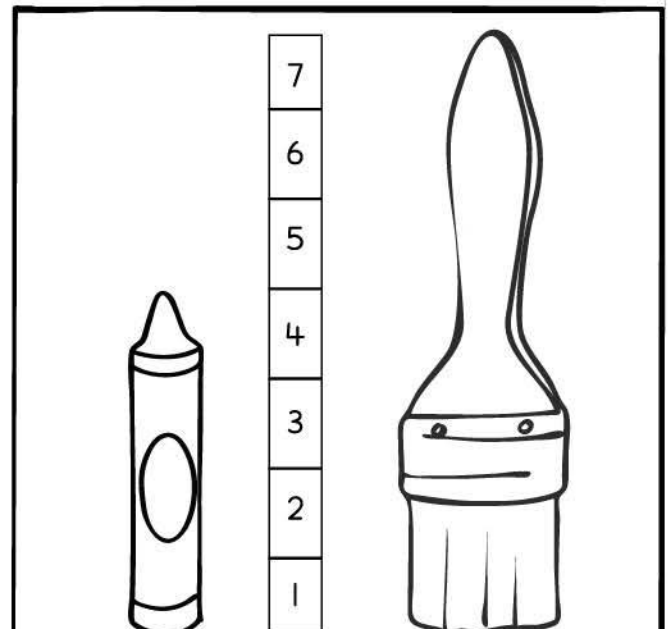
A notepad and a pair of scissors are shown next to a vertical ruler with units numbered 1 to 7. The notepad is 5 units tall, and the scissors are 4 units tall.

\_\_\_ units      \_\_\_ units



A cactus in a pot and a book are shown next to a vertical ruler with units numbered 1 to 7. The cactus is 5 units tall, and the book is 2 units tall.

\_\_\_ units      \_\_\_ units



A crayon and a paintbrush are shown next to a vertical ruler with units numbered 1 to 7. The crayon is 3 units tall, and the paintbrush is 6 units tall.

\_\_\_ units      \_\_\_ units